

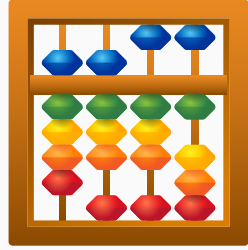
Name: \_\_\_\_\_

Score: \_\_\_\_\_

Class: \_\_\_\_\_

Date: \_\_\_\_\_

# Subtraction



Find the sum.


strawberry

$$6 - 2 =$$




pineapple

$$9 - 4 =$$



pear

$$7 - 3 =$$



apple

$$4 - 1 =$$



banana

$$8 - 5 =$$



apricot

$$5 - 3 =$$

